

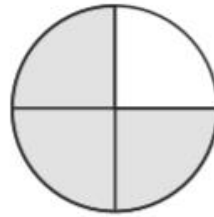
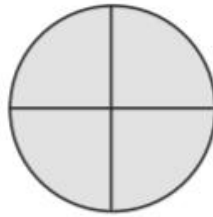
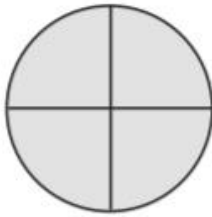
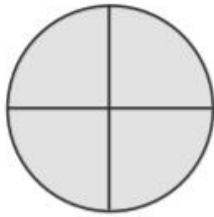
# Improper Fractions

Write the proper fractions and mixed numbers represented by the shapes below.

Improper  
Fraction

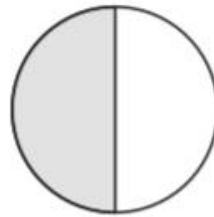
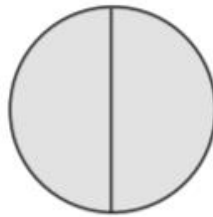
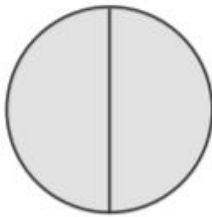
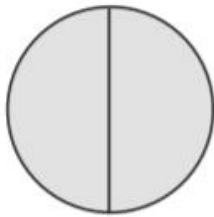
Mixed  
Number

a)  $\frac{15}{4}$   
\_\_\_\_\_



$3\frac{3}{4}$   
\_\_\_\_\_

b) \_\_\_\_\_



\_\_\_\_\_

c) \_\_\_\_\_



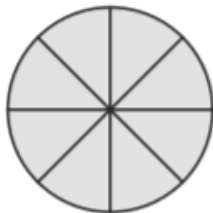
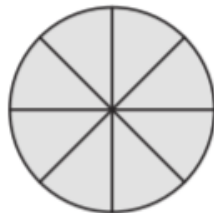
\_\_\_\_\_

d) \_\_\_\_\_



\_\_\_\_\_

e) \_\_\_\_\_



\_\_\_\_\_

f) \_\_\_\_\_



\_\_\_\_\_